

2A 司徒詠詩

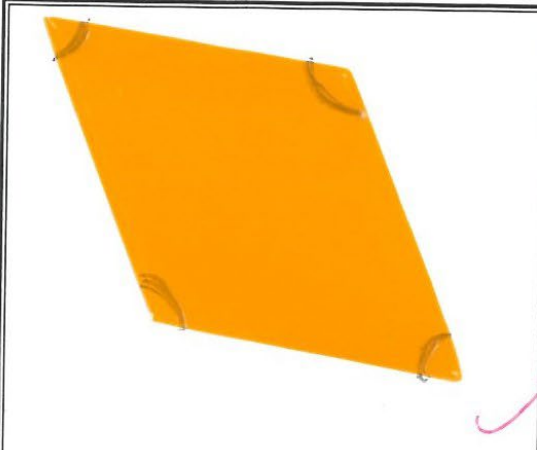



姓名：司徒詠詩 班別：2 A (18)

1. 兩線由直線組成 2. 兩線必要相交

3. 用角的指示符號標示

4. 拉開邊，角變大 5. 合攏邊，角變小

請於以下圖形標示角的符號。請畫出 3 個不同大小的角。

詠詩，角的標示清楚，直線

2021年 10月 20日

較很筆直，有用心，欣賞。

2B 范語希

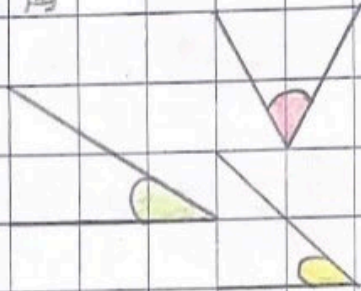
CHECKED 17 DEC 2021

2B04 范語希

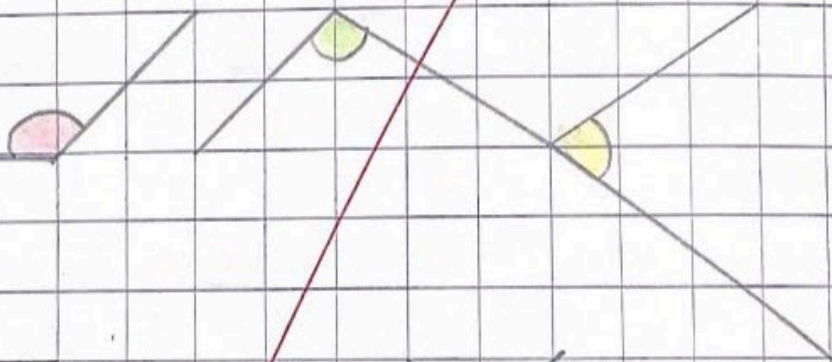


29 - 10 - 2021

1) 銳角



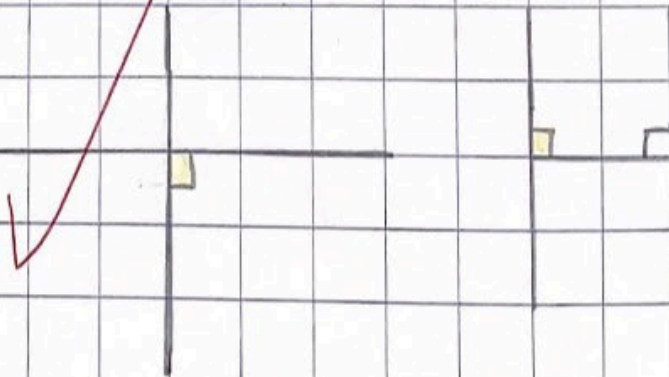
2) 鈍角



3) 直角



4) 垂直線



2C 黃家甜

姓名：黃家甜 班別：2C (17)

家甜，角畫得
端正、清楚。欣賞





1. 兩線由直線組成 2. 兩線必要相交

3. 用角的指示符號標示

4. 拉開邊，角變大 5. 合攏邊，角變小

請於以下圖形標示角的符號。請畫出 3 個不同大小的角。

25/10/2021

乘法

10-1-2022



$$2 + 2 + 2 + 2 = 8$$

4個2是8。

2的4倍是8。

$$2 \times 4 = 8$$



$$4 + 4 = 8$$

2個4是8

4的2倍是8

$$4 \times 2 = 8$$

 WELL DONE

 WELL DONE

閱

二〇二二年一月十日

2E 劉欣彤


CHECKED 17 DEC 2021

2E15 劉欣彤

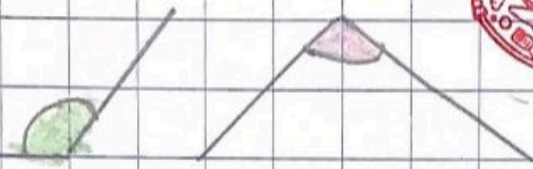
29-10-2021

角


1) 銳角



2) 鈍角



3) 直角



4) 垂直線

